



NAME: _____

WEEK OF: _____

21.0



Chad's Piggy Bank

Chad has a piggy bank. It is painted green. That is good because his favorite kind of money is a dollar. Chad loves to get dollars to put in his piggy bank. He can be a helper to get money for his piggy bank. Chad makes his bed. He walks the dog. Chad helps clean and he picks up his toys. He can do other jobs too! When Chad's piggy bank is full, he will buy a new toy he wants.

12

23

37

49

61

73

81

FLUENCY CHECK	Read #1	Read #2	Read #3	Read #4
Number of words read in 1 minute				
Number of errors				
Fluency (number of words read in 1 minute minus errors)				

Fluency, Comprehension, and Language Homework

After you circle the answer to each question, color the letter circle that matches.

1. What is a good word to describe Chad?

- a. messy
- b. helpful
- c. lazy

(a) (b) (c)

2. Which statement is *false*?

- a. Chad's piggy bank is green.
- b. Chad doesn't save his money.
- c. Chad works hard to earn money.

(a) (b) (c)

3. What kind of passage is this?

- a. fiction
- b. nonfiction
- c. poetry

(a) (b) (c)

4. What will Chad buy when he gets enough money in his piggy bank?

LANGUAGE

Read these Nonsense Words out loud.

tib weg pox tux ruz dib

Circle the word that is spelled correctly in each row.

- 1. ane any anie
- 2. coold could cowlid
- 3. evry every evvery

What word is missing?

Chad works very _____ to earn money.

hard

harder

hardest

NAME: _____

WEEK OF: _____

22.0



How to Ride a Horse

These kids know how to ride a horse. They want to show you how to ride a horse! First you need to get a horse. Put a saddle on the horse. Next you need to get on the horse. Use the saddle to help get on. Last you need to hold on. Be nice to the horse as you ride. Last, you need to get off the horse. Go slow as you get down. You can pet the horse at the end.

12
25
38
50
63
76
82

FLUENCY CHECK	Read #1	Read #2	Read #3	Read #4
Number of words read in 1 minute				
Number of errors				
Fluency (number of words read in 1 minute minus errors)				

Fluency, Comprehension, and Language Homework

After you circle the answer to each question, color the letter circle that matches.

1. What can you learn from this passage?

- (a.) (b.) (c.)

- a. You can learn how to enter a horse show.
- b. You can learn there are steps to follow to ride a horse the correct way.
- c. You can learn how to wash a horse.

2. It's important to get off the horse:

- (a.) (b.) (c.)

- a. quickly
- b. loudly
- c. slowly

3. This passage is an example of a/an:

- (a.) (b.) (c.)

- a. all about
- b. how to
- c. personal narrative

4. What is the first step when riding a horse?

LANGUAGE

Read these Nonsense Words out loud.

cib bep jas guv lim nep

Circle the word that is spelled correctly in each row.

- 1. think thenk thinke
- 2. ovr ovre over
- 3. sttop stop stope

Fill in the blank with an adjective (describing word) of your choice.

The horse was _____ and tall.

Name _____



Mighty Math

Operations and Algebraic Thinking

Circle if the equation is true. Cross out if the equation is false.

$10 + 4 = 14$

$6 + 7 = 12$

$11 + 3 = 15$

$6 + 4 = 10$

$3 + 8 = 11$

$2 + 5 = 8$

$9 + 5 = 16$

$12 + 2 = 14$

Number and Operations in Base Ten

Example



$30 - 10 = 20$

Answer the equations. Draw ten sticks to show your work.

$60 - 10 =$


$70 - 20 =$

$40 - 20 =$

$50 - 20 =$

$30 - 20 =$

Measurement and Data


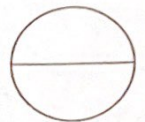





How many more picked candy than cake?

How many less picked ice cream than cookies?


Geometry

Circle the pictures that show halves.



Color by Difference

Name: _____



10-3, 8-1, 9-2, 7-0, 10-1, 9-0, 9-0, 10-3, 9-2, 9-0, 7-0, 10-1, 10-1, 9-0, 5-2, 10-5, 8-4, 12-2, 15-5, 10-7, 6-3, 10-0, 6-2, 11-1, 6-1, 9-0, 8-3, 8-3, 9-3, 10-4, 5-1, 4-0, 10-5, 9-4, 12-2, 8-4, 6-1, 8-2, 8-3, 8-3, 7-2, 10-5, 6-2, 8-3, 9-4, 15-5, 8-4, 6-1, 7-2, 6-2, 6-2, 11-1, 10-0, 10-0, 8-3, 10-2, 9-5, 6-1, 8-4, 6-2, 6-2, 8-3, 8-0, 10-2, 8-0, 8-0, 6-0, 7-1, 8-0, 8-0, 10-2, 8-0, 8-0, 6-0, 7-1, 9-1, 10-2, 9-1.

Name _____



23



Mighty Math

Operations and Algebraic Thinking

Read. Draw. Solve. Don't forget to write an equation.

The baker has 18 cookies. Some people came. Now the baker has 11 fewer cookies. How many cookies does the baker still have left?

Number and Operations in Base Ten

Example:



$$30 + 4 = 34$$

Answer the equations. Draw ten sticks and ones to show your work.

$$60 + 3 =$$

$$70 + 5 =$$

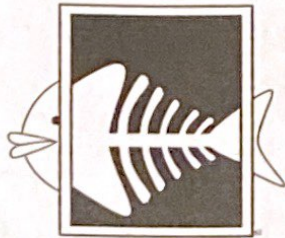
$$40 + 2 =$$

$$50 + 7 =$$

$$30 + 6 =$$

Measurement and Data

Make a sentence to compare the lengths of these 3 objects.



Geometry


I am a 3 D shape. I can roll. Balls can be in my shape. The Earth is in my shape too. What shape am I?

Draw or write something else in my shape.

NAME: _____

WEEK OF: _____

23.0



The Trip

These kids are going on a trip. They are ready to go! 12
 They packed things in bags and suitcases. They will like 22
 the ride in the airplane. The airplane will go fast! The 33
 plane ride will be long so they have books to read and 45
 games to play. The kids will take pictures on the trip. 56
 They will have a lot of fun! The boy and girl will go back 70
 home on the airplane. They will think about the trip and 81
 what fun they had! 85

FLUENCY CHECK	Read #1	Read #2	Read #3	Read #4
Number of words read in 1 minute				
Number of errors				
Fluency (number of words read in 1 minute minus errors)				

Fluency, Comprehension, and Language Homework

After you circle the answer to each question, color the letter circle that matches.

1. What happens at the beginning of the passage?

- a. The kids go home on the airplane.
- b. The kids get on the plane for the trip.
- c. The kids pack their bags and get ready for the trip

(a) (b) (c)

2. The airplane will go _____.

- a. slow
- b. over the water
- c. fast

(a) (b) (c)

3. What kind of passage is this?

- a. fiction
- b. nonfiction
- c. poetry

(a) (b) (c)

4. What does this story remind you of or make you think about?

LANGUAGE

Read these Nonsense Words out loud.

raz ket til pok wud dub

Circle the word that is spelled correctly in each row.

1. guud goud good

2. he hee hei

3. hafe have hav

Which word from the story is an adjective (describing word)?

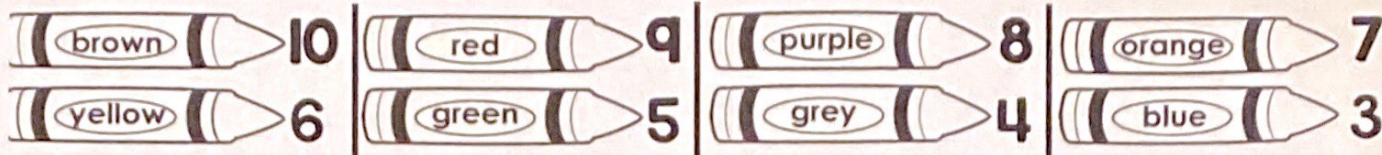
airplane

fast

kids

Color by Difference

Name: _____



A large illustration of a tree with many leaves and a trunk. Each leaf and branch contains a simple subtraction problem. The problems are:

- 6-2
- 8-4
- 6-2
- 10-7
- 8-0
- q-5
- 10-2
- q-1
- 6-3
- 8-4
- 10-2
- q-6
- 6-2
- 8-4
- 5-2
- 10-2
- 7-1
- 10-6
- 6-2
- 8-4
- 8-1
- 8-2
- 10-1
- q-3
- 6-2
- q-5
- 10-6
- 10-3
- 8-2
- q-0
- 6-0
- q-1
- 8-5
- 10-4
- q-2
- 6-3
- 5-2
- 10-2
- q-1
- 8-0
- q-1
- 10-2
- 10-2
- q-6
- 8-0
- q-1
- 6-3
- 8-0
- q-1
- 10-2
- q-1
- 15-5
- 4-1
- q-1
- 6-3
- 8-0
- 10-2
- q-1
- 15-5
- 5-2
- 10-7
- 10-2
- q-1
- 7-2
- 8-5
- 5-2
- 10-0
- 15-5
- 5-2
- 10-7
- 10-2
- q-1
- 7-2
- 8-5
- 12-2
- 11-1
- 10-2
- 3-0
- 6-1
- 10-5
- 6-1
- 7-2
- 10-5
- 6-1
- 7-2
- 10-5

Name _____



Mighty Math



Operations and Algebraic Thinking

Complete the fact family for 6, 3, 9.

$6 + 3 = \square$

$9 - 3 = \square$

$3 + \square = 9$

$\square - 6 = 3$

Number and Operations in Base Ten

Write an equation for these tens stick pictures.

Example:

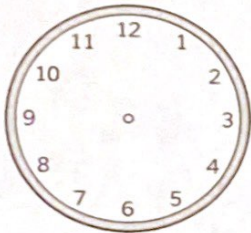


$40 - 20 = 20$




Measurement and Data

Write the time on the clock.




5.30



12:30

Geometry



What is this shape?

What shape is the face?


How many faces? _____

How many points? _____

NAME: _____

WEEK OF: _____

24.0



Kate's Kite

Kate loves to fly her kite, 6
 She finds a windy day that is just right. 15

She runs as her kite goes so high, 23
 She likes to watch it in the sky. 31

Her colorful kite is the best, 37
 It flies up above the rest. 43

FLUENCY CHECK	Read #1	Read #2	Read #3	Read #4
Number of words read in 1 minute				
Number of errors				
Fluency (number of words read in 1 minute minus errors)				

Fluency, Comprehension, and Language Homework

After you circle the answer to each question, color the letter circle that matches.

1. What is the *main idea* of this poem?

(a) (b) (c)

- a. Kate made a kite.
- b. Kate enjoys flying her kite.
- c. Kate is scared to fly her kite.

2. This poem probably takes place in Winter.

(a) (b) (c)

- a. true
- b. false

3. What do you think it is like outside on this day?

(a) (b) (c)

- a. snowy
- b. windy
- c. rainy

4. What does this poem remind you of or make you think about?

LANGUAGE

Read these Nonsense Words out loud.

nel vab til zet wop tud

Circle the word that is spelled correctly in each row.

- 1. who whoo whho
- 2. went whent wheet
- 3. whin when whan

Put the words in alphabetical order.

sky kite fly
